



SEF Assisted Schools (SAS)

Existing School Support Program (ESSP) Assessment Feb - Mar 2019



Sindh Education Foundation
Government of Sindh

Assessment Unit

Subject	Marks	Time
English	15	40 Minutes
Mathematics	15	40 Minutes
Science	20	40 Minutes
Total	50	120 Minutes

INSTRUCTIONS FOR THE STUDENT

شاگرد جي لاءِ هدايتون

Objective Part

معروضي حصو

▪ All questions are compulsory.	▪ سڀ سوال لازمي آهن.
▪ All questions carry equal marks.	▪ سڀني سوالن تي هڪ جيتريون مارڪون رکيل آهن.
▪ Do not fill more than one option for one question. Multiple options will be considered wrong.	▪ هڪ سوال جي جواب لاءِ هڪ کان وڌيڪ اختيارن کي نه ڀريو. گهڻن اختيارن واري جواب کي غلط تصور ڪيو ويندو.
▪ Fill correct options according to the following example.	▪ جوابن کي هيٺ ڏنل مثال مطابق چڱيءَ ريت ڀريو.
<div style="text-align: center;"> (A) (B) (C) (D) </div>	
▪ Pencil should be used to fill the answers.	▪ جوابن واري گولڙي کي ڀرڻ لاءِ پينسل جو استعمال ڪريو.
▪ Finish each part in the given time as mentioned in the paper.	▪ پيپر ۾ ڏنل هر هڪ حصي کي ڏنل وقت مطابق حل ڪريو.
▪ Use the given blank page for rough work.	▪ رف ڪم لاءِ ڏنل خالي صفحو استعمال ڪريو.

INSTRUCTIONS FOR THE STUDENT

شاگرد جي لاءِ هدايتون

Subjective Part

موضوعي حصو

▪ All questions are compulsory.	▪ سڀ سوال لازمي آهن.
▪ Finish each question in the given time as mentioned in the paper.	▪ موضوعي حصي کي پيپر ۾ ڏنل وقت مطابق حل ڪريو.
▪ Avoid over writing or untidy work.	▪ ٻڌي لکڻي ۽ ڊاهه ڏوهه واري ڪم کان پاسو ڪريو.
▪ Use the given blank page for math's rough work.	▪ رياضيءَ جو رڻ ڪم ڪرڻ لاءِ ڏنل خالي صفحو استعمال ڪريو.
▪ Pencil should be used to write the answers.	▪ جواب لکڻ لاءِ پينسل جو استعمال ڪريو.

MCQ Practice

1. Name of our country is

1. اسانجي ملڪ جونالو آهي

Kenya.

Ⓐ

ڪينيا.

Pakistan.

Ⓑ

پاڪستان.

Malaysia.

Ⓒ

ملائيشيا.

Indonesia.

Ⓓ

انڊونيشيا.

2. Add.

2. جوڙ ڪريو.

$$2 + 2 = \underline{\hspace{2cm}}.$$

4

Ⓐ

5

Ⓑ

6

Ⓒ

7

Ⓓ

English

1. Identify the uncountable noun from the following.

Bags	Ⓐ
Stars	Ⓑ
Chairs	Ⓒ
Books	Ⓓ

2. Choose the preposition from the following.

a	Ⓐ
an	Ⓑ
in	Ⓒ
the	Ⓓ

3. Select the verb from the following sentence.

He wanted to become a doctor.

- | | |
|--------|---|
| he | Ⓐ |
| doctor | Ⓑ |
| wanted | Ⓒ |
| become | Ⓓ |

4. Which of the following sentences is written in the “Past Continuous Tense”?

- | | |
|----------------------------------|---|
| I am waiting for you. | Ⓐ |
| He goes for a walk daily. | Ⓑ |
| We were watching movie. | Ⓒ |
| They will be going to for picnic | Ⓓ |

5. Identify the adjective in the given sentence.

She is younger than me.

- | | |
|---------|---|
| me | Ⓐ |
| she | Ⓑ |
| than | Ⓒ |
| younger | Ⓓ |

6. Identify the Masculine gender from the following.

- | | |
|---------|---|
| mare | Ⓐ |
| vixen | Ⓑ |
| emperor | Ⓒ |
| empress | Ⓓ |

7. Write the comparative degrees of the given words.

(Marks 02)

i) **Small** _____

ii) **Big** _____

8. Correct the given incorrect sentences.

(Mark 02)

i) the We watching were movie.

ii) sky in The grey the are clouds.

9. Convert the following sentence into Past Continuous Tense.

(Mark 01)

i) I am going to my home.

10. With the help of a line, (—) match the following word with its appropriate contraction.

(Mark 01)

Word		Contractions
You are		you'll
		you're

11. Read the passage carefully and write the answers of given questions.

(Marks 03)

“Saving Water”

Aiza was sitting in her room suddenly she heard the sound of tripping water. She went outside to find out from where the water is tripping. She went in the kitchen and she saw her younger brother playing with the water. The water was all over the kitchen floor. She quickly closed the tap. She asked her younger brother to clean the floor. After that, she took him inside the room and told him that it is very bad to waste the water. Water is very important for all the living things. Ehsan said sorry for wasting water and promised her to save the water.

i) Where was the water tripping?

ii) Who was playing with the water?

iii) Why should we save the water?

“Rough Work”

Mathematics

12. Identify the missing digit in the following. 12. هيٺ ڏنل حساب مان ڪٽل انگ جي سڃاڻپ ڪريو.

$$\begin{array}{r} 954672 \\ - \bigcirc 73420 \\ \hline 581252 \end{array}$$

- 1 (A)
2 (B)
3 (C)
4 (D)

13. $\frac{3}{5}$ is the reciprocal of 13. $\frac{3}{5}$ جو ابتر آهي

- $\frac{1}{3}$ (A)
 $\frac{2}{3}$ (B)
 $\frac{3}{4}$ (C)
 $\frac{5}{3}$ (D)

14. A man has two parcels having weights of 2.93 kilograms and 13.265 kilograms. The total weight of these two parcels in kilograms would be

14. هڪ ماڻهو ٻه پارسل آهن، جن جو وزن ترتيبوار 2.93 ڪلوگرام ۽ 13.265 ڪلوگرام آهي. انهن ٻنهي پارسلن جو ڪلوگرامن ۾ ڪل وزن ٿيندو



- 13.950 (A)
14.232 (B)
16.195 (C)
17.229 (D)

15. Solve.

15. حل ڪريو.

$$\frac{15}{14} \div \frac{3}{2} = \underline{\hspace{2cm}}$$

- $\frac{2}{3}$ (A)
 $\frac{3}{4}$ (B)
 $\frac{3}{5}$ (C)
 $\frac{5}{7}$ (D)

16. Subtract.

16. ڪٽ ڪريو.

metres	centimetres
11	45
– 6	60
<hr style="border: 0.5px solid black;"/>	
<hr style="border: 0.5px solid black;"/>	

3 metres 32 centimetres

Ⓐ

3 ميٽر 32 سينٽي ميٽر

3 metres 55 centimetres

Ⓑ

3 ميٽر 55 سينٽي ميٽر

4 metres 85 centimetres

Ⓒ

4 ميٽر 85 سينٽي ميٽر


4 metres 47 centimetres

Ⓓ

4 ميٽر 47 سينٽي ميٽر

17. Identify the percentage of the shaded parts of the given figure.

17. هيٺ ڏنل شڪل جي رنگ ڀريل حصن کي سيڪڙي ۾ سڃاڻپ ڪريو.



35%

Ⓐ

40%

Ⓑ

65%

Ⓒ

70%

Ⓓ

18. Simplify and show steps.

18. سادي صورت ۾ آڻيو. مرحلا ڏيکاريو.

(Marks 03)

$$(7.4 - 3.5) \times 5$$

19. Find the least number of oranges that can be equally distributed among 4, 8 and 10 children. Show steps.

19. نارنگين جواهو گهٽ ۾ گهٽ تعداد معلوم ڪريو جيڪو 4، 8 ۽ 10 ٻارن ۾ برابر ورهائي سگهجي. مرحلا ڏيکاريو.

(Marks 03)



20. The price of 2 dozen bananas is Rs 120. What would be the price of 5 dozen bananas? Show steps.

20. 2 درجن ڪيلن جي قيمت 120 روپيا آهي. 5 درجن ڪيلن جي ڪل قيمت ڪيتري ٿيندي؟ مرحلا ڏيکاريو.

(Marks 03)



Science

21. Which of the following is a warm blooded animal? 21. هيٺ ڏنل جانورن مان ڪهڙو گرم رت وارو جانور آهي؟

Alligator

Ⓐ

واڳون

Penguin

Ⓑ

پينگوين

Turtle

Ⓒ

ڪمي / ڪچون

Frog

Ⓓ

ڏيڏر

22. Ferns and mosses are the examples of

22. فرن ۽ موسيز مثال آهن

seed plant.

Ⓐ

بجن واري ٻوٽي جا.

seedless plant.

Ⓑ

بغير بجن واري ٻوٽي جا.

hibiscus plant.

Ⓒ

هيبسڪس ٻوٽي جا.

sunflower plant.

Ⓓ

سورج مڪيءَ جي ٻوٽي جا.

23. Microscope is used to see

23. مائڪروسڪوپ جنهن کي ڏسڻ لاءِ استعمال ٿيندي آهي، اهو آهي

star.

Ⓐ

تارو.

tree.

Ⓑ

وڻ.

bacteria.

Ⓒ

بيڪٽيريا.

building.

Ⓓ

عمارت.

24. Common cold is caused by the

24. عام زڪام جنهن سبب جي ڪري ٿيندو آهي، اهو آهي

bacteria.

Ⓐ

بيڪٽيريا.

fungi.

Ⓑ

فنجائي.

virus.

Ⓒ

وائرس.

yeast.


Ⓓ

خمير.

25. Which of the following parts of the seed contains stored food? 25. هيٺ ڏنل ٻج جي حصن مان ڪهڙي حصي ۾ خوراڪ گڏ/جمع ٿيل هوندي آهي؟

Embryo	Ⓐ	ايمبريو
Seed coat	Ⓑ	سيڊ ڪوٽ
Cotyledons	Ⓒ	ڪاٽيليدنس
Endosperm	Ⓓ	اينڊواسپرم

26. Identify the type of germination in the given picture. 26. هيٺ ڏنل تصوير کي ڏسو ۽ ڦوٽهڙي جي قسم جي سڃاڻپ ڪريو.



Hypogeal germination	Ⓐ	هائيپوجيٽل ڦوٽهڙو
Ordinary germination	Ⓑ	عام ڦوٽهڙو
Epigeal germination	Ⓒ	ايبجي جيٽل ڦوٽهڙو
Special germination	Ⓓ	خاص ڦوٽهڙو

27. Which of the following is **not** the cause of land pollution?

27. هيٺ ڏنل عنصرن مان اهو ڪهڙو عنصر آهي جيڪو زمين جي گدلاڻ جو سبب نه آهي.

Sewage from home

Ⓐ

گهرو نيڪال جو پاڻي

Dumping solid waste

Ⓑ

گند ڪچرو اڇلائڻ

Smoke from factories

Ⓒ

فيڪٽرين جو دونهون

Sewage from industries

Ⓓ

فيڪٽرين جي نيڪال جو پاڻي

28. The force of attraction between the molecules of solid is

28. نهري جي ماليڪيولن جي وچ ۾ ڪشش واري طاقت هوندي آهي

very strong.

Ⓐ

گهڻي طاقتور

strong.

Ⓑ

طاقتور

moderate.

Ⓒ

وچٿري / وچولي

low.


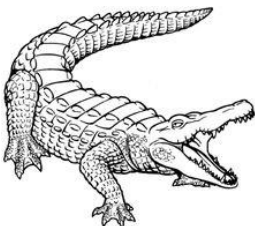


Ⓓ

گهٽ

29. Classify the following vertebrates.
One example is given.

29. هيٺ ڏنل ڪرنگهي وارن جانورن جي درجہ بندي
ڪريو. هڪ مثال طور حل ڪيل آهي.

(Marks 03)

Vertebrates ڪرنگهي وارا	Pictures of Animals جانورن جون تصويرون	Classification درجہ بندي
Penguin پينگوين		
Crocodile واڳون		
Tiger چيتو		
Frog ڏيڏر		Amphibian جلڻل واسي

30. Animals that have hair on their
body are called


30. اهي جانور جن کي جسم تي وار/بيج هوندا آهن، انهن
کي چڻيو آهي

(Marks 01)

31. The picture shows washed cloths hanging on a line to dry.

31. هيٺ ڏنل تصوير ۾ ڪپڙا تار تي سڪڻ لاءِ تنگيل آهن.

(Marks 04)



Choose the words from the list given below and place it in a best suitable position.

هيٺ ڏنل خاني مان صحيح لفظ چونڊيو ۽ خال ڀريو.

windy, hot, surface, evaporated

هوادار، گرم، مٽاچري، آبي بخار

i) Cloths dry more quickly when it is a _____ and _____ day.

• ڪپڙا ان وقت تمام جلدي سڪي ويندا جڏهن ڏينهن _____ ۽ _____ هجي.

ii) The Sun dries up the water in the clothes and it is _____.

• سج جي ڪري ڪپڙن جو پاڻي سڪي ويندو آهي ۽ اهو _____ بڻجي اڏامي ويندو آهي.

iii) On a windy day the water is carried away from the _____ of the clothes.

• جنهن ڏينهن هوا گهڻي گهلي ته پاڻي کي ڪپڙن جي _____ تان کڻي ويندي آهي.

32. Define hypogeal germination.

32. هٽپو جيئل ڦوٽهڙي جي وصف لکيو.

(Mark 01)

33. label the following diagram.

33. هيٺ ڏنل شڪل تي نالا لکيو.

(Marks 03)

