



## SEF Assisted Schools (SAS)

### Existing School Support Program (ESSP) Assessment Feb - Mar 2019



Sindh Education Foundation  
Government of Sindh

# Assessment Unit

Subject	Marks	Time
English	15	40 Minutes
Mathematics	15	40 Minutes
General Knowledge	20	40 Minutes
<b>Total</b>	<b>50</b>	<b>120 Minutes</b>

## INSTRUCTIONS FOR THE STUDENT

شاگرد جي لاءِ هدايتون

## Objective Part

معروضي حصو

▪ All questions are compulsory.	▪ سڀ سوال لازمي آهن.
▪ All questions carry equal marks.	▪ سڀني سوالن تي هڪ جيتريون مارڪون رکيل آهن.
▪ Do not fill more than one option for one question. Multiple options will be considered wrong.	▪ هڪ سوال جي جواب لاءِ هڪ کان وڌيڪ اختيارن کي نه ڀريو. گهڻن اختيارن واري جواب کي غلط تصور ڪيو ويندو.
▪ Fill correct options according to the following example.	▪ جوابن کي هيٺ ڏنل مثال مطابق چڱيءَ ريت ڀريو.
<div style="text-align: center;">           (A)            (B)            (C)            (D)         </div>	
▪ Pencil should be used to fill the answers.	▪ جوابن واري گولڙي کي ڀرڻ لاءِ پينسل جو استعمال ڪريو.
▪ Finish each part in the given time as mentioned in the paper.	▪ پيپر ۾ ڏنل هر هڪ حصي کي ڏنل وقت مطابق حل ڪريو.
▪ Use the given blank page for rough work.	▪ رف ڪم لاءِ ڏنل خالي صفحو استعمال ڪريو.

## INSTRUCTIONS FOR THE STUDENT

شاگرد جي لاءِ هدايتون

### Subjective Part

موضوعي حصو

▪ All questions are compulsory.	▪ سڀ سوال لازمي آهن.
▪ Finish each question in the given time as mentioned in the paper.	▪ موضوعي حصي کي پيپر ۾ ڏنل وقت مطابق حل ڪريو.
▪ Avoid over writing or untidy work.	▪ ٻڌي لکڻي ۽ ڊاهه ڏوهه واري ڪم کان پاسو ڪريو.
▪ Use the given blank page for math's rough work.	▪ رياضيءَ جو رڻ ڪم ڪرڻ لاءِ ڏنل خالي صفحو استعمال ڪريو.
▪ Pencil should be used to write the answers.	▪ جواب لکڻ لاءِ پينسل جو استعمال ڪريو.

### MCQ Practice

1. Name of our country is

1. اسانجي ملڪ جونالو آهي

Kenya.

Ⓐ

ڪينيا.

Pakistan.

Ⓑ

پاڪستان.

Indonesia.

Ⓒ

انڊونيشيا.

2. Add.

2. جوڙ ڪريو.

$$2 + 2 = \underline{\hspace{2cm}}.$$

4

Ⓐ

6

Ⓑ

8

Ⓒ

## English

1. Identify the proper noun.

Father



Ahmed



Boy

©

- 2. Fill the past tense from the following words.**

## Run

ran



rain



runned

©

- 3. Select the sentence that has the correct use of apostrophe.**

This is Saba's bag.

**A**

This is Sabas' bag.

**B**

This is Saba!s bag.

©

4. Identify the masculine.

hen



bull

ⓑ

aunty

©

**5. Choose the common noun.**

Girl



Shabir

®

Karachi

©

**6.** Complete the following sentence by choosing the suitable article.

I ate \_\_\_\_\_ egg in the breakfast.

a



an

®

the

©

7. With the help of a line, (—) match the following nouns with their appropriate pronouns.

(Marks 03)

Noun		Pronoun
Dog		She
Hina		He
Ahmed and Sheeraz		We
Faraz		They

8. Write the plural of the given words.

(Marks 02)

Singular	Plural
Tooth	
Child	

9. Rewrite the following sentence by using proper punctuations.

(Mark 01)

are you coming today

---



10. Read the passage carefully and write the answers of given questions.

**(Marks 03)**

**“A Picnic”**

Ali and his family are going for a picnic. They are keeping food and drinks in the basket. His sister takes skipping and his brother takes football. Ali’s Father will drive the car which is in red color it can go fast and far. Ali and his family will enjoy a lot. It will be memorable picnic.

i) Where is Ali and his family going?

---

---

ii) What did they keep in the basket?

---

---

iii) Who will drive the car?

---

---

**“Rough Work”**

## Mathematics

11. 17 in Roman number is written as

11. 17 کي رومن انگن ۾ لکبو

XIX

Ⓐ

XVII

Ⓑ

XIII

Ⓒ

12. Identify the 3-digit number from the following.

12. هيٺ ڏنل عددين مان 3 انگي عدد جي سڃاڻپ ڪريو.

9

Ⓐ

18


Ⓑ

365

Ⓒ

13. Which of the following units is used to measure the length of pencil?

13. هيٺ ڏنل ايڪن مان پينسل جي ڊيگهه ماپڻ لاءِ ڪهڙو ايڪو استعمال ٿيندو آهي؟



metre

Ⓐ

ميٽر

kilometre

Ⓑ

ڪلوميٽر

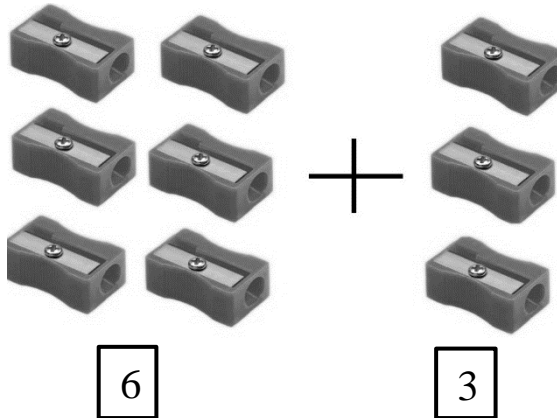
centimetre

Ⓒ

سينٽي ميٽر

14. Add.

14. جوڙ ڪريو.



5

Ⓐ

8

Ⓑ

9

Ⓒ

15. 6 birds are sitting on a tree out of which 3 flew away, how many birds are sitting on a tree now?

15. هڪ وڻ تي 6 پکي ويٺل آهن. جيڪڏهن انهن مان 3 پکي اڏامي وڃن ته باقي وڻ تي ڪيترا پکي بچندا؟



2

Ⓐ

3

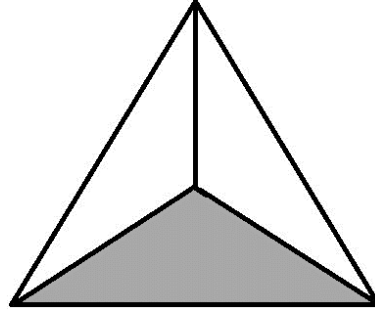
Ⓑ

5

Ⓒ

16. Identify the fraction of the shaded part in the given figure.

16. هيٺ ڏنل شڪل جي رنگ ڀريل حصي جي اٽڀوري  
سڃاڻپ ڪريو.



$\frac{1}{2}$

$\frac{1}{3}$

$\frac{2}{3}$

(A)


(B)

(C)

17. Distance between Karachi, Jamshoro and Matiari is shown on the map below. Find the distance from Karachi to Matiari. Show steps.

17. هيٺ ڏنل نقشي ۾ ڪراچي، ڄامشورو ۽ مٽياري شهرن جي وچ وارو مفاصلو ڏيکاريل آهي. ڪراچي ۽ مٽياري جي وچ وارو مفاصلو معلوم ڪريو. مرحلا ڏيکارو.

(Marks 03)



---

---

---

---

---

---

---

---

18. There are 4 cupcakes in a plate.  
How many cupcakes would be in  
such 12 plates? Show steps.

18. هڪ ٽالهيءَ ۾ 4 ڪپ ڪيڪ رکيل آهن. ٻڌايو ته  
اهڙين 12 ٽالھين ۾ ڪل ڪيترا ڪپ ڪيڪ هوندا؟  
مرحلا ڏيکاريو.

(Marks 03)



---

---

---

---

---

---

---



19. Write the time in the given boxes in p.m ۽ a.m ۾ ڏسڻدي خانن ۾ هيٺ ڏنل گهڙيالن کي ڏسڻدي خانن ۾ ۾ ۽ p.m ۽ a.m جي مطابق وقت لکو.
- a.m or p.m as shown in the following clocks.

(Marks 3)

Night

رات



After Noon

منجهند



Evening

شام



### General Knowledge

20. Energy, which we get from the sun is called  
اسان جيڪا توانائي سج مان حاصل ڪندا آهيون، ان کي چئبو آهي

wind energy. (A) هوائي توانائي.

solar energy. (B) شمسي توانائي.

food energy. (C) کاڌي جي توانائي.

21. The Polar region of earth is very  
زمين جو قطبي علائقو آهي تمام گهڻو

hot. (A) گرم.

cold. (B) ٿڌو.

humid. (C) گهميل.

22. The body of the given animal is covered with

22. هيٺ ڏنل جانور جو جسم ڇا ڪيل آهي



fur.

Ⓐ

پشم سان.

scales.

Ⓑ

چلرن سان.

feathers.

Ⓒ

کڻين سان.

23. In the life cycle of a frog, the second stage is

23. ڏيڌر جي جيون چڪر ۾ ٻيون مرحلو آهي

eggs.

Ⓐ

آنا.

froglet.

Ⓑ

ٻچت ڏيڌر.

tadpole.

Ⓒ

ٽيڊپول.

24. Identify the food group from the given picture.

24. هيٺ ڏنل تصوير ۾ ڏيکاريل کاڌي جي گروهه جي سڃاڻپ ڪريو.



Milk and dairy

Ⓐ

کير ۽ ان مان ٺهيل شيون

Carbohydrate

Ⓑ

نشاستو

Vegetable

Ⓒ

پاڇيون

25. Which of the following teeth are used to rip and tear food?

25. هيٺ ڏنل ڏندن مان ڪهڙا ڏند کاڌي کي چيرڻ ۽ ڦاڙڻ لاءِ استعمال ٿيندا آهن؟

Incisors

Ⓐ

اڳيان ڏند

Canines

Ⓑ

تيز نوڪ وارا ڏند

Molars

Ⓒ

پينهڻ وارا ڏند

26. Identify the natural resource from the following.

26. هيٺين مان قدرتي وسيلي جي سڃاڻپ ڪريو.

Air

Ⓐ

هوا

Plastic

Ⓑ

پلاسٽڪ

Cement

Ⓒ

سيمينٽ

27. Identify the given plant.

27. هيٺ ڏنل ٻوٽي جي سڃاڻپ ڪريو.



biome

Ⓐ

بائيوم

cactus

Ⓑ

توهر

aloe vera

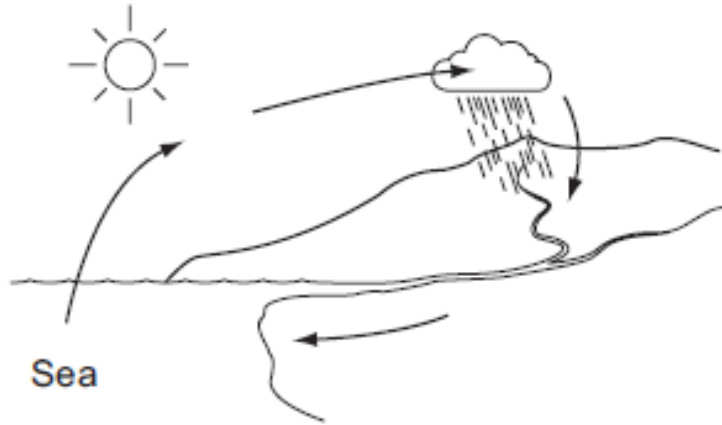
Ⓒ

ڪنوار ٻوٽي

28. The water cycle is shown in the diagram below.

28. هيٺ ڏنل تصوير ۾ آبي چڪر ڏيکاريل آهي.

(Marks 02)



Choose the best suitable words to fill and complete the following sentence given below.

هيٺ ڏنل لفظن مان مناسب لفظ چونڊيو ۽ جملا مڪمل ڪريو.

Sun

سج

Water vapors

آبي بخار

Clouds

گڙ

Heat from the \_\_\_\_\_ turns the water in the sea and lakes into \_\_\_\_\_. then water falls as rain.

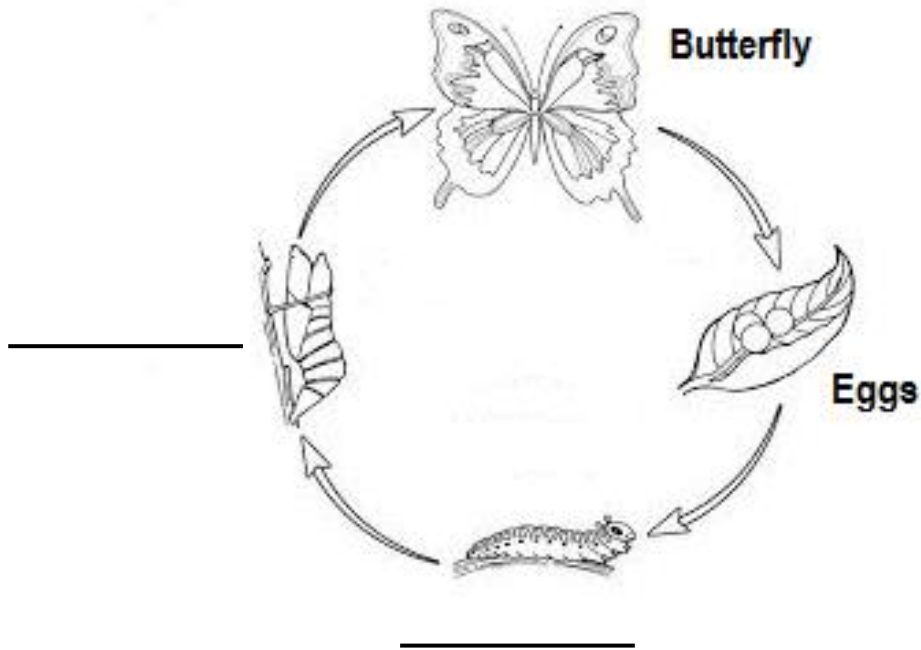
گرمي جيڪا \_\_\_\_\_ مان ملي ٿي اها سمنڊ ۽ ڍنڍن جي پاڻيءَ کي

\_\_\_\_\_ ۾ تبديل ڪري ٿي. ان کان پوءِ مينهن وسي ٿو.

29. Label the following diagram.

29. هيٺ ڏنل شڪل جا نالا لکو.

(Marks 02)



30. Explain the features and importance of forest.

30. ٻيلي جون خاصيتون ۽ اهميت بيان ڪريو.

(Marks 02)

Ans. \_\_\_\_\_  
\_\_\_\_\_  
\_\_\_\_\_  
\_\_\_\_\_

31. Write **any two** points on the importance of minerals.

31. معدنيات جي اهميت بابت ڪي به ٻه ٽڪڻا لکو.

(Marks 02)

Ans. \_\_\_\_\_  
\_\_\_\_\_  
\_\_\_\_\_  
\_\_\_\_\_



32. With the help of a line, (—) match the function of the given parts of a plant. 32. ٻوٽي جي حصن کي انهن جي ڪمن سان ليڪ (—) وسيلي ملايو.

(Marks 02)

Parts of Plant ٻوٽي جو حصا		Function ڪم
Flowers گل		take in water پاڻي کڻڻ ٿيون
Leaves پن		make seeds بج ٺاهڻ ٿا
Roots پاڙون		make food کاڌو ٺاهڻ ٿا

33. Enlist **any two** sources that plants need for healthy growth. 33. ٻوٽن کي صحتمند واڌ ويجهه لاءِ گهربل ڪي به ٻه ذريعا لکو.

(Marks 02)

- i) \_\_\_\_\_
- ii) \_\_\_\_\_